

Please read all the questions VERY carefully before answering. If you do not understand any question, please ask. Use the reverse side of the question paper as scratch. Use the periodic table and constant chart in the last page. No outside paper is allowed. Total points =  $75+(27 \times 3)=81=156$

SHORT ANSWER. Please write the set-up equation first, then insert the raw data with units in the equation before doing your calculations. Points will be deducted if your answer is not clear.

1) Calculate the mass (in grams) of  $1.56 \times 10^{21}$  atoms of magnesium. (6 pts.)

1) \_\_\_\_\_

2) Calculate the number of atoms in 39.7 g chlorine gas (Note the the formula of Chlorine). (6 pts.)

2) \_\_\_\_\_

3) Show your calculation to determine the number of molecules in 78.0 grams of sulfur trioxide. (8 pts.)

3) \_\_\_\_\_

4) Calculate the amount (in grams) of potassium in a 42.7 gram sample of potassium nitrate. (10 pts.)

4) \_\_\_\_\_

5) Calculate the mass percent of carbon in oxalic acid,  $\text{H}_2\text{C}_2\text{O}_4$ . (10 pts.)

5) \_\_\_\_\_

6) An acid has 40% C, 6.7% H, 53.3% O and its molar mass is 60.05 g/mol. Show your calculation to find the molecular formula of the acid? (10 pts.)

6) \_\_\_\_\_

7) In the reaction between  $\text{Fe}_2\text{O}_3$  (s) and Al (s) to produce Fe (s) and  $\text{Al}_2\text{O}_3$  (s), 23.5 g of  $\text{Fe}_2\text{O}_3$  was reacted with 13.2 g of Al. (a) Show all your calculations to find out the limiting reagent (Hint: You may want to balance the reaction first) (8 pts.) 7) \_\_\_\_\_

(b) Calculate the amount (in grams) of the reagent that remained unreacted (6 pts.)

8) In separating a mixture of sand and salt, a student had with following data:

8) \_\_\_\_\_

- (a) 1.11 g salt
- (b) 1.11 g sand
- (c) The mass of an empty beaker where he would collect the salt sample = 71.60 g
- (d) The mass of the beaker with the dry salt residue = 72.61 g
- (e) The mass of a empty watch glass + clean filter paper = 43.45 g
- (f) The mass of a the watch glass + filter paper + dry sand = 44.55 g

Show all your calculations to find out the (1) the % recovery of salt (4 pts.) and (2) the % recovery of sand (4 pts.).

9) (a) Calculate how many grams of magnesium sulfate is in 63.6 grams of its hydrate salt . The hydrate salt contains 51.1% water by weight. (3 pts.)

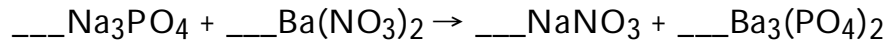
9) \_\_\_\_\_

MULTIPLE CHOICE. On scantron, answer the questions starting from number 10. Choose the one alternative that best completes the statement or answers the question. (3 points each)

- 10) What is the oxygen-to-sulfur mass ratio of sulfur dioxide? 10) \_\_\_\_\_  
A) 0.5  
B) 1.0  
C) 2.0  
D) 16  
E) none of the above
- 11) How many total atoms are in the formula  $\text{Al}_2(\text{CO}_3)_3$ ? 11) \_\_\_\_\_  
A) 9  
B) 12  
C) 14  
D) 8  
E) none of the above
- 12) Which among the following elements does NOT exist as a diatomic molecule in nature? 12) \_\_\_\_\_  
A) nitrogen  
B) fluorine  
C) hydrogen  
D) neon  
E) none of the above
- 13) Which of the following is a molecular compound? 13) \_\_\_\_\_  
A) calcium acetate  
B) nitrogen monoxide  
C) potassium hydroxide  
D) barium sulfide  
E) none of the above
- 14) What is the formula for an ionic compound made of aluminum and oxygen? 14) \_\_\_\_\_  
A)  $\text{AlO}$   
B)  $\text{AlO}_2$   
C)  $\text{Al}_2\text{O}_3$   
D)  $\text{Al}_3\text{O}_2$   
E) none of the above
- 15) What is the name of the ionic compound made of beryllium and chlorine? 15) \_\_\_\_\_  
A) monoberyllium dichloride  
B) beryllium(II) chloride  
C) beryllium dichloride  
D) beryllium chloride  
E) none of the above

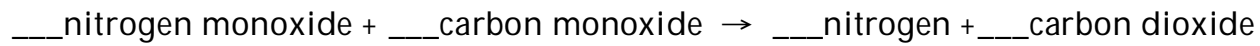
- 16) What is the name of the compound whose formula is  $\text{Na}_2\text{O}$ ? 16) \_\_\_\_\_  
A) disodium oxide  
B) sodium oxide  
C) sodium monoxide  
D) disodium monoxide  
E) none of the above
- 17) What is the formula mass of copper(II) fluoride? 17) \_\_\_\_\_  
A) 101.55  
B) 90.00  
C) 165.10  
D) 146.10  
E) none of the above
- 18) You have 10.0 g each of Na, C, Pb, Cu and Ne. Which contains the largest number of moles? 18) \_\_\_\_\_  
A) C                      B) Pb                      C) Cu                      D) Na                      E) Ne
- 19) How many moles of fluorine are in 3.2 moles of xenon hexafluoride? 19) \_\_\_\_\_  
A) 19.2  
B) 12.8  
C) 16  
D) 22.4  
E) none of the above
- 20) Determine the empirical formula of a compound containing 60.3% magnesium and 39.7% oxygen. 20) \_\_\_\_\_  
A)  $\text{MgO}_2$   
B)  $\text{MgO}$   
C)  $\text{Mg}_2\text{O}_3$   
D)  $\text{Mg}_2\text{O}$   
E) none of the above
- 21) What is the value of n when the empirical formula is  $\text{C}_3\text{H}_5$  and the molecular mass is 205.4 g/mol? 21) \_\_\_\_\_  
A) 10  
B) 5  
C) 0.02  
D) 140  
E) none of the above

22) What are the coefficients for the following reaction when it is properly balanced? 22) \_\_\_\_\_



- A) 6, 1, 3, 2
- B) 2, 1, 1, 3
- C) 2, 3, 6, 1
- D) 2, 3, 1, 6
- E) none of the above

23) What are the coefficients for the following reaction when it is properly balanced? 23) \_\_\_\_\_

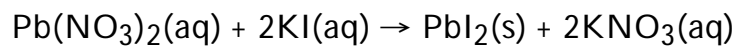


- A) 2, 1, 1, 2
- B) 1, 1, 2, 2
- C) 2, 2, 1, 2
- D) 2, 2, 2, 1
- E) none of the above

24) Which of the following compounds is INSOLUBLE? 24) \_\_\_\_\_

- A) magnesium iodide
- B) magnesium nitrate
- C) magnesium sulfate
- D) magnesium phosphate
- E) none of the above

25) Considering the following precipitation reaction: 25) \_\_\_\_\_



Which ion(s) would NOT be present in the net ionic equation?

- A)  $\text{Pb}^{2+}$ ,  $\text{NO}_3^-$
- B)  $\text{K}^+$ ,  $\text{I}^-$
- C)  $\text{K}^+$ ,  $\text{NO}_3^-$
- D)  $\text{K}^+$ ,  $\text{Pb}^{2+}$
- E) All the above ions are in the net ionic equation.

26) Identify the double displacement reactions among the following: 26) \_\_\_\_\_

1.  $\text{KCl}(\text{aq}) + \text{AgNO}_3(\text{aq}) \rightarrow \text{AgCl}(\text{s}) + \text{KNO}_3(\text{aq})$
2.  $\text{Na}_2\text{SO}_4(\text{aq}) + \text{BaCl}_2(\text{aq}) \rightarrow \text{BaSO}_4(\text{s}) + 2\text{NaCl}(\text{aq})$
3.  $\text{H}_2\text{SO}_4(\text{aq}) + 2\text{NaOH}(\text{aq}) \rightarrow \text{Na}_2\text{SO}_4(\text{aq}) + 2\text{H}_2\text{O}(\text{l})$

- A) 1 and 3 only
- B) 2 and 3 only
- C) 1 and 2 only
- D) All of 1, 2, and 3
- E) None of 1, 2, and 3

27) How many moles of chlorine gas are needed to make 0.6 moles of sodium chloride? 27) \_\_\_\_\_  
Given the reaction:  $2\text{Na} + \text{Cl}_2 \rightarrow 2\text{NaCl}$   
A) 0.6  
B) 3.6  
C) 0.3  
D) 1.2  
E) not enough information

28) How many grams of sodium metal are needed to make 29.3 grams of sodium chloride? 28) \_\_\_\_\_  
Given the reaction:  $2\text{Na} + \text{Cl}_2 \rightarrow 2\text{NaCl}$   
A) 5.75  
B) 11.5  
C) 46.0  
D) 23.0  
E) not enough information

29) Many metals react with halogens to give metal halides. For example, 29) \_\_\_\_\_  
 $2\text{Al}(\text{s}) + 3\text{Cl}_2(\text{g}) \rightarrow 2\text{AlCl}_3(\text{s})$   
If you begin with 13.5 g of aluminum,  
A) you will need 11.8 g  $\text{Cl}_2$  for complete reaction and will produce 49.0 g of  $\text{AlCl}_3$ .  
B) you will need 23.6 g  $\text{Cl}_2$  for complete reaction and will produce 66.7 g of  $\text{AlCl}_3$ .  
C) you will need 53.2 g  $\text{Cl}_2$  for complete reaction and will produce 66.7 g of  $\text{AlCl}_3$ .  
D) you will need 26.6 g  $\text{Cl}_2$  for complete reaction and will produce 49.0 g of  $\text{AlCl}_3$ .  
E) none of the above

30) What is the theoretical yield of waffles if you have 6 cups of flour, 9 eggs and 2 tbs of oil? 30) \_\_\_\_\_  
Given:  $2\text{ cups flour} + 3\text{ eggs} + 1\text{ tbs oil} \rightarrow 4\text{ waffles}$   
A) 8  
B) 10  
C) 12  
D) 4  
E) not enough information

31) What is the theoretical yield of a reaction if 25.0 grams of product were actually produced 31) \_\_\_\_\_  
from a reaction that has a 88% yield?  
A) 352  
B) 28.4  
C) 22.0  
D) 3.52  
E) none of the above

TRUE/FALSE. On scantron, choose "A" for a true answer and "B" for wrong answer. (3 points each)

32) The correct formula for calcium fluoride is  $\text{CaF}_3$ . 32) \_\_\_\_\_

33) One mole of  $\text{I}_2$  has more atoms in it than one mole of Na. 33) \_\_\_\_\_

34) The theoretical yield is the amount of each reactant needed in order to make the maximum 34) \_\_\_\_\_  
amount of product.



35) The actual yield is the same as the theoretical yield if the reaction goes to completion and there is no loss of product. 35) \_\_\_\_\_

36) The limiting reactant is not necessarily the reactant with the least mass. 36) \_\_\_\_\_