

Read questions carefully before answering. No outside paper is allowed. Write **set up equation** for a mathematical problem, then put the raw data with **units**, before showing the calculation. Use the reverse side of your answer paper as scratch. Use the periodic table and important constants charts provided. (Total points = $62 + (17 \times 3) = 113$).

Show your calculation with set up and units (when appropriate)

1) In the reaction $\text{N}_2(\text{g}) + 3 \text{H}_2(\text{g}) \leftrightarrow 2 \text{NH}_3(\text{g})$, if the $K_C = 9.60$ at 573 K, then calculate the K_p at this temperature (4 pts.) 1) _____

2) Equilibrium was established when a mixture of 0.20 mol of $\text{NO}(\text{g})$, 0.10 mol of $\text{H}_2(\text{g})$, and 0.20 mol of $\text{H}_2\text{O}(\text{g})$ is placed in a 2.0-L vessel at 400 K. The equilibrium reaction is : $2 \text{NO}(\text{g}) + 2 \text{H}_2(\text{g}) \leftrightarrow \text{N}_2(\text{g}) + 2 \text{H}_2\text{O}(\text{g})$. If at equilibrium $[\text{NO}] = 0.062 \text{ M}$, then calculate K_p . (10 pts.) 2) _____

3) In the equilibrium rxn. $\text{Butane (g)} \leftrightarrow \text{Isobutane (g)}$, assume equilibrium has reached in a 1.0 L flask with $[\text{Butane}] = 0.5 \text{ M}$ and $[\text{Isobutane}] = 1.23 \text{ M}$ at 298 K. The equilibrium constant for the reaction = 2.5 and afterwards 1.5 mol of Butane was added to the mixture. Calculate the new values of $[\text{Butane}]$ and $[\text{Isobutane}]$ when equilibrium was reestablished (8 pts.)? 3) _____

4) Calculate the pH of a solution if 1.35 moles of NaOH is in 530.00 mL of water. (8 pts.) 4) _____

5) What is the pH and the pOH of a 0.050M HClO; K_a of HClO is 3.5×10^{-8} . Show your calculation with ICE chart (if necessary). (6+2 = 8 pts.) 5) _____

6) Calculate the pH of a buffer solution that contains 0.820 grams of sodium acetate and 0.01 moles of acetic acid in 100 ml of water. The K_a of acetic acid is 1.77×10^{-5} (8 pts) 6) _____

7) Calculate the pH of a 0.7M NaClO solution. For your calculation show what happens in a stepwise fashion . K_a of HClO is 3.448×10^{-8} (8 pt.) 7) _____

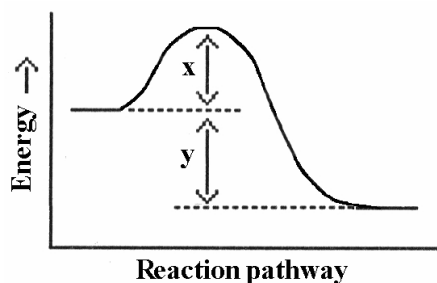
8) Calculate the molar solubility of CaF_2 at 25°C in a solution that is 0.010 M in $\text{Ca}(\text{NO}_3)_2$. K_{sp} for $\text{CaF}_2 = 3.9 \times 10^{-11}$. Show your calculation with ICE chart (8 pts.). 8) _____

MULTIPLE CHOICE. On your scantron, start answering from number 9. Select the one alternative that best completes the statement or answers the question (3 pts each).

9) As the temperature of a reaction is increased, the rate of the reaction increases because the _____ 9) _____

- A) reactant molecules collide less frequently and with greater energy per collision
- B) activation energy is lowered
- C) reactant molecules collide more frequently and with greater energy per collision
- D) reactant molecules collide less frequently
- E) reactant molecules collide more frequently with less energy per collision

10) Which energy difference in the energy profile below corresponds to the activation energy for the forward reaction? 10) _____

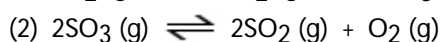
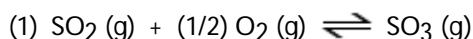


- A) x
- B) y
- C) $y - x$
- D) $x - y$
- E) $x + y$

11) How does the reaction quotient of a reaction (Q) differ from the equilibrium constant (K_{eq}) of the same reaction? 11) _____

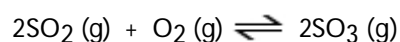
- A) K does not depend on the concentrations or partial pressures of reaction components.
- B) Q is the same as K_{eq} when a reaction is at equilibrium.
- C) Q does not depend on the concentrations or partial pressures of reaction components.
- D) K_{eq} does not change with temperature, whereas Q is temperature dependent.
- E) Q does not change with temperature.

12) The equilibrium constant for reaction 1 is K. The equilibrium constant for reaction 2 is _____ 12) _____



- A) $1/2K$ B) K^2 C) $-K^2$ D) $2K$ E) $1/K^2$

13) The reaction below is exothermic: 13) _____



Le Chatelier's Principle predicts that _____ will result in an increase in the number of moles of $\text{SO}_3(\text{g})$ in the reaction container.

- A) removing some oxygen
- B) increasing the pressure
- C) increasing the volume of the container
- D) decreasing the pressure
- E) increasing the temperature

14) The equilibrium reaction $\text{Co}(\text{H}_2\text{O})_6^{2+}(\text{aq})$ (Pink) + $4 \text{Cl}^-(\text{aq}) \rightleftharpoons \text{CoCl}_4^{2-}(\text{aq})$ (Blue) + $6 \text{H}_2\text{O}(\text{l})$ turns pink when placed in ice water mixture but turns blue in hot water. The reaction, as shown, is: 14) _____

- A) Nonthermic
- B) Endothermic
- C) Exothermic
- D) Insufficient data

15) In which of the following aqueous solutions does the weak acid exhibit the highest percentage ionization? 15) _____

- A) 0.01 M HClO ($K_a = 3.0 \times 10^{-8}$)
- B) 0.01 M HNO_2 ($K_a = 4.5 \times 10^{-4}$)
- C) 0.01 M $\text{HC}_2\text{H}_3\text{O}_2$ ($K_a = 1.8 \times 10^{-5}$)
- D) 0.01 M HF ($K_a = 6.8 \times 10^{-4}$)
- E) These will all exhibit the same percentage ionization.

- 16) Which of the following aqueous solutions has the highest $[\text{OH}^-]$? 16) _____
- A) a solution with a pOH of 12.0
 - B) a 1×10^{-3} M solution of NH_4Cl
 - C) a 1×10^{-4} M solution of HNO_3
 - D) a solution with a pH of 3.0
 - E) pure water

- 17) A 0.1 M aqueous solution of _____ will have a pH of 7.0 at 25.0 °C. 17) _____
- NaOCl KCl NH_4Cl $\text{Ca}(\text{OAc})_2$

- A) NaOCl
- B) KCl
- C) NH_4Cl
- D) $\text{Ca}(\text{OAc})_2$
- E) KCl and NH_4Cl

- 18) Which one of the following pairs cannot be mixed together to form a buffer solution? 18) _____
- A) $\text{NaC}_2\text{H}_3\text{O}_2$, HCl ($\text{C}_2\text{H}_3\text{O}_2^-$ = acetate)
 - B) NH_3 , NH_4Cl
 - C) KOH, HF
 - D) H_3PO_4 , KH_2PO_4
 - E) RbOH, HBr

TRUE/FALSE. On the scantron, select answer 'A' if the statement is true and 'B' if the statement is false (3 pts each).

- 19) H_2SO_3 and H_2SO_4 are considered an acid-base conjugate pair. T or F
- 20) The conjugate base to HSO_4^- is SO_4^{2-} . T or F
- 21) The extent of ionization of a weak electrolyte is increased by adding to the solution a strong electrolyte that has an ion in common with the weak electrolyte. T or F
- 22) The solubility product of a compound is numerically equal to the product of the concentration of the ions involved in the equilibrium, each multiplied by its coefficient in the equilibrium reaction. T or F
- 23) At constant temperature, reducing the volume of a gaseous equilibrium mixture causes the reaction to shift in the direction that increases the number of moles of gas in the system. T or F
- 24) In an exothermic equilibrium reaction, increasing the reaction temperature favors the formation of reactants. T or F
- 25) The solubility of slightly soluble salts containing basic anions is proportional to the pH of the solution. T or F